


Date: _____

Name: _____

Do the Magnets Attract or Repel?

This activity was created by Zoe.



Looks like we need to decode a problem.
Will the magnets below attract "1" or repel "0"?
Circle the correct answer!

1.



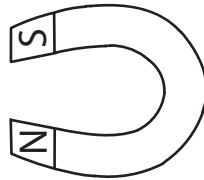
Attract "1" or Repel "0"

2.



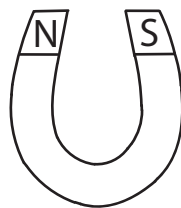

Attract "1" or Repel "0"

3.



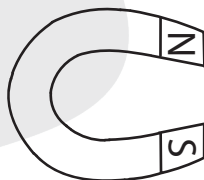
Attract "1" or Repel "0"

4.



Attract "1" or Repel "0"

5.



Attract "1" or Repel "0"