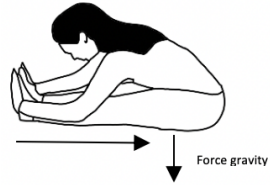
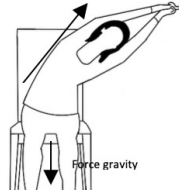
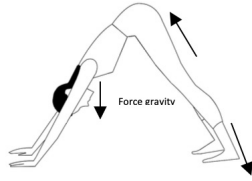
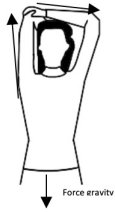


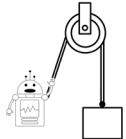

Tear here if you don't want the answer key!

Answer Key

Forces Related to Stretching



Simple Machine Matching



INCLINED PLANE

LEVER

GEAR

WHEEL AND AXLE

SCREW

PULLEY

WEDGE

Simple Machine Outputs

1. A pulley
2. A class one lever
3. An inclined plane
4. Any of the following: A pulley, lever, wedgewheel and axle
5. Wheel and axle
6. A screw
7. Gears